

SOCIAL STUDIES 2022

1. Name the major line of latitude marked $23\frac{1}{2}^{\circ}\text{N}$ on the globe.

2. State one role of a local council chairperson in our villages.

3. How can people of your community improve on their incomes?

4. Name the Bantu tribe of South Africa who were much affected by the great trek.

5. Name one item that is used to promote sanitation in a school.

6. Why is the government dividing Uganda into small administrative units?

7. Give one danger created by use of mobile phones in our country.

8. How are the monsoon winds useful to farmers?

9. Name any one African country that lies in Eastern and Western hemisphere. _____
10. Mention one way in which industrial growth is a danger to people around.

11. Give any one factor a trader considers before deciding on the type of transport to use to transport his goods.

12. Write one reason why a child is given a name.

13. What is referred to the steep sides of the rift valley?

14. State any one reason that hindered early Europeans entry into the interior of Africa.

15. Name the pastoral tribe that lives in North Eastern Uganda.

16. Why should Uganda have members of Parliament?

17. Give any one effect of war to the economy of a country.

18. State one reason for raising the Uganda National Flag at a half mast.

19. How did the building of railway lines in Uganda promote agriculture?

20. Name the body that promotes tourism activities in Uganda.

21. Why is it difficult for the government to spread information to rural areas?

22. Write UNICEF in full.

23. Why is it important for children to know their relatives?

24. Name the horst mountain found in Uganda.

25. Give one way slave trade affected the economy of Africa state.

26. How do people living in the Sahara desert guard themselves against the sun's heat?

27. Why did the some European explorers die when they came to Africa?

28. Name one cultural practice that can cause harm to community members.

29. How do plants in equatorial region adapt to climatic conditions.

30. What have African countries done to reduce insecurity in horn of African Communities?

31. Why is it important for traffic policemen to rush to points where road accidents have occurred?

32. Give a reason why places in the equatorial region receive double maxima.

33. State one way family members can help to improve on the home incomes.

34. State any one reason why mob justice is on rise in our communities.

35. Give any one effect of rotation of the earth.

For questions 36 – 40, answer either Christianity or Islamic but not both on a number.

36Either. Name the first prophet in Christianity.

Or. Name the last prophet in Islam.

37 **Either.** Name any one place where Christians go for pilgrimage.

Or: Name any one place where Moslems go for pilgrimage.

38. **Either:** Why are believers in Jesus Christ encouraged to pray together?

Or: Why are believers in Allah encouraged to pray together.

39. **Either:** Give one way Christians benefit from the talent of God gave them.

Or: Give one way Moslems benefit from the talent of Allah gave them.

40. **Either:** In which way did God show love to man in the story of creation?

Or: In which way did God show love to man in the story of creation?

SECTION B

41a) What is subsistence farming?

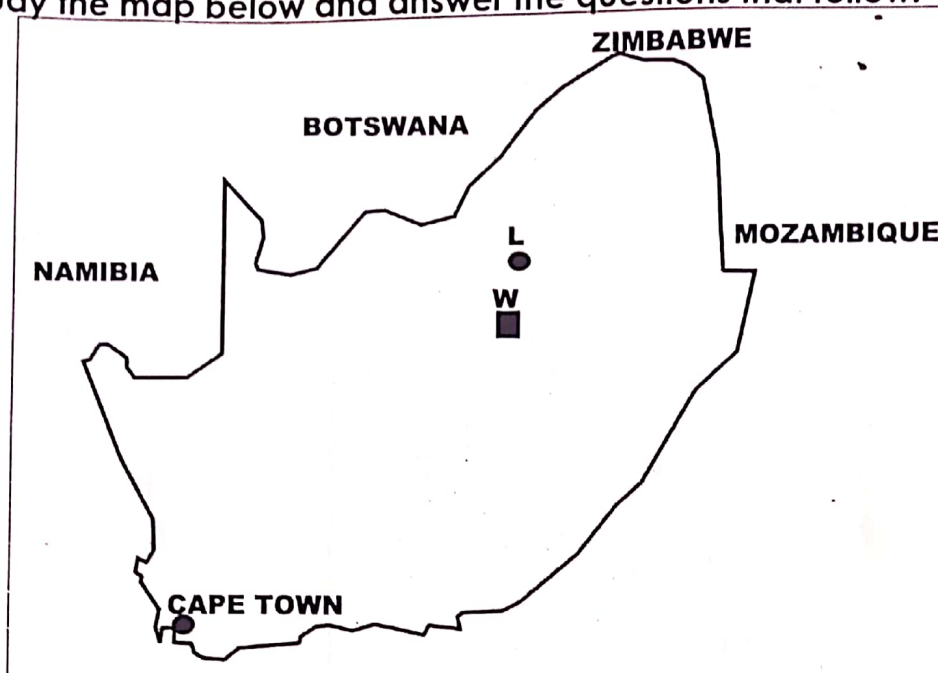
b) Name any one problem faced by farmers in Uganda.

c) Write down any two ways the government of Uganda is helping farmers to improve their incomes.

i) _____

ii)

42. Study the map below and answer the questions that follow.



a) Name the industrial town marked L.

b) Mention any one mineral mined in area marked W

c) Give any two reasons why country has developed faster than East Africa countries.

i) _____

ii) _____

43a) What is a constitution?

b) Why is the current constitution of Uganda called "the peoples constitution"?

c) Why should a country like Uganda have a constitution?

d) Which ministry in Uganda is responsible for constitution affair's?

44a) What is a common-wealth state?

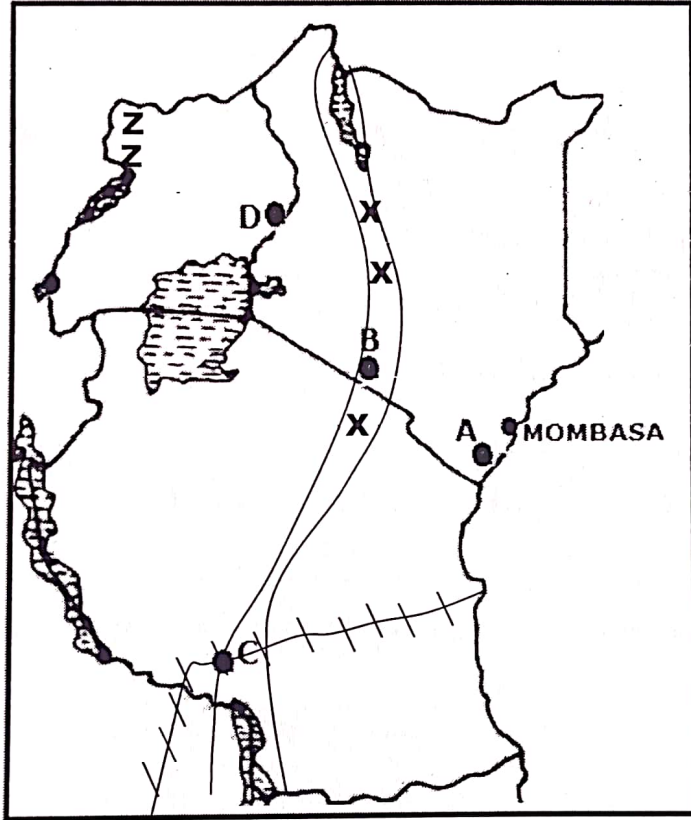
b) Write any two ways how a country benefits from being a member of the common-wealth.

i) _____

ii) _____

c) Give any one way common wealth states differ from one another.

45a) Study the map of East Africa and answer the questions that follow.



a) Name the rail way line marked C.

b) How is the railway line useful to the economy of country Z.

c) Name any one lake found in area shaded XXX.

d) Why was the area ZZ transferred from Zaire to (DRC) to Uganda.

46. a) Name the automated feature put on the road that controls the traffic flows.

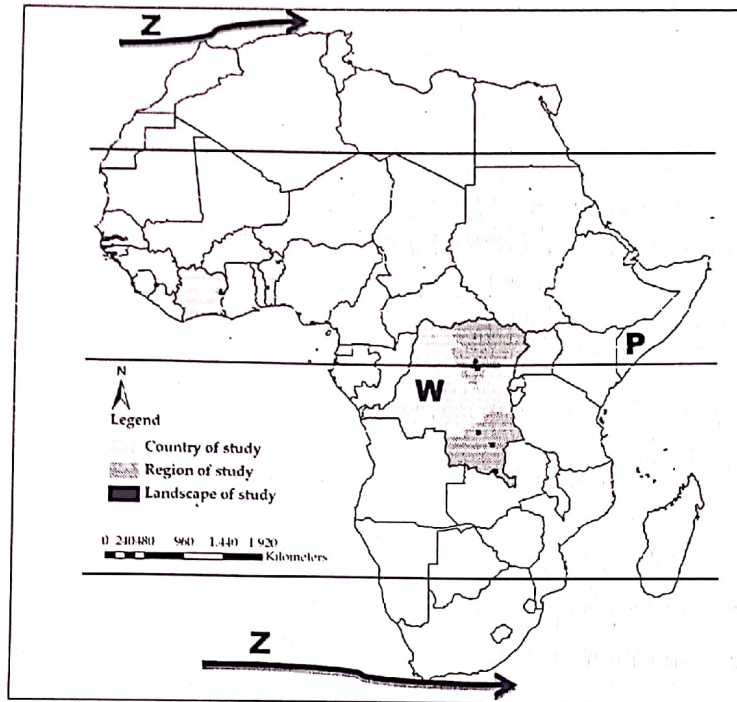
b) State any two ways the traffic police help to promote road safety.

i) _____

ii) _____

c) Which body is responsible for the activities of the Uganda air lines.

47. Study the map below and answer questions that follow.



a) Name the winds marked **Z**.

b) Write down any one social problem faced by country marked **P**.

c) Give any two factors that make road construction difficult in country marked **W**?

i) _____

ii) _____

48a) Name the type of vegetation with scattered trees and tall grass.

b) Give any one way in which the following affect vegetation.

i) attitude _____

ii) nature of soil _____

c) How can trees found in a school compound be a danger to it?

49a) What is a kingdom?

b) Why were some pre-colonial societies unable to form kingdoms?

c) Write any two ways the current kingdoms have boosted development in Uganda.

i) _____

ii) _____

For questions 51 – 55, answer either Christianity or Islamic questions but both on the number.

50 **Either** a) How is helping one another useful in Christian life?

b) Give two ways how Jesus showed concern over his followers.

i) _____

ii) _____

Or. How is helping one another useful in Islamic life?

b) Give two ways how Prophet Muhammed (PBUH) showed concern over his followers.

i) _____

ii) _____

c) What lesson do we learn from Jesus' concern?

d) What do we learn from Prophet Mohammed concern.

51a) **Either:** What is religious marriage?

b) Identify the commandment of God that protects the married from contracting AIDS.

c) Write down any one cause of divorce among the married people.

Or. What is Nikkah?

b) Write down the commandment of Allah that protects the married from contracting AIDS.

c) Write down any one cause of divorce among the married people.

52a) **Either.** Name the apostle of Jesus who doubted His resurrection.

b) Why did Jesus Christ choose apostles?

c) Give two ways were Apostles useful after Jesus ascension.

i) _____

ii) _____

Or: Name the caliph who succeeded Prophet Mohammed after his death.

b) Why did Prophet Mohammed choose caliphs?

c) Give two ways how caliphs were useful after the death of Prophet Mohammed.

i) _____

ii) _____

53**Either a)** What does the word "seed" mean in the parable of the sower?

b) State two reasons why some Christians fail to practice what is preached to them

i) _____

ii) _____

c) How can a friend in a school help others to know the word of God?

Or a: What does the word Khutuba mean?

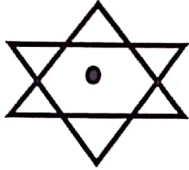

b) State two reasons why some Moslems fail to practice what is preached to them.

i) _____

ii) _____

c) How can a friend in a school help others to know the word of Allah?



54a **Either.** Name the world religions whose symbols are drawn below.

b) Who is the founder of the religion whose symbol is drawn in no. 54a(i)?

c) Give one importance of religious symbols to believers.

Or: Name the Islamic symbols to believers.

b) Give two importance of Islamic symbols to believers.

i) _____

ii) _____

55 **Either a)** What are relief organizations?

b) Mention any two Christians relief organisation operating in Uganda.

i) _____

ii) _____

c) Write any one way how relief organizations promoted development in Uganda.

Or: What are relief organisations?

b) Mention any two Islamic relief organizations operating in Uganda.

i) _____

ii) _____

d) Write any one way how relief organizations promote development in Uganda.

.....**End**.....